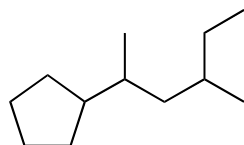


Problems from your text

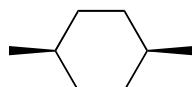
3.1, 3.4, 3.6, 3.8, 3.10, 3.11, 3.12, 3.15, 3.16, 3.19, 3.24, 3.27, 3.30, 3.32, 3.35, 3.36, 3.39, 3.40, 3.42, 3.44, 3.45, 3.47, 3.49, 3.52, 3.55.

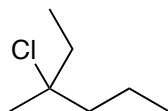
Additional Practice Problems

Provide either an IUPAC name or a structure for the following:



trans-2,5-dimethyl-3-hexene





(1-methylbutyl)cycloheptane