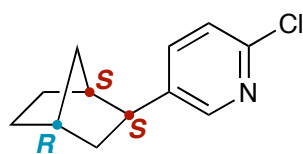
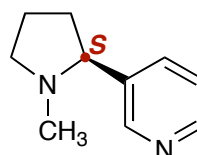


### Additional Practice Problems

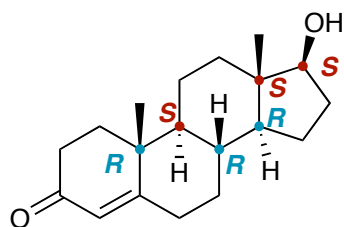
Indicate the R or S configuration for every stereocenter in the molecules shown below.



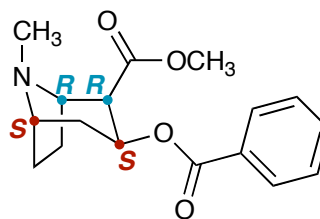
epibatidine



nicotine



Testosterone



cocaine