



Chem 341 • Organic Chemistry I

Suggested Problems • Chapter 03

Problems from your text

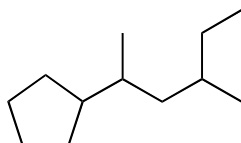
As a minimum, you should do the following problems from your textbook.

You can find answers in the solutions manual.

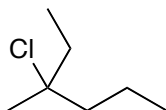
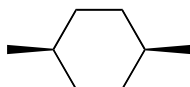
3.1, 3.4, 3.6, 3.8, 3.10, 3.11, 3.12, 3.15, 3.16, 3.19, 3.24, 3.27, 3.30, 3.32, 3.35, 3.36, 3.39, 3.40, 3.42, 3.44, 3.45, 3.47, 3.49, 3.52, 3.55.

Additional Practice Problems

Provide either an IUPAC name or a structure for the following:



trans-2,5-dimethyl-3-hexene



(1-methylbutyl)cycloheptane