

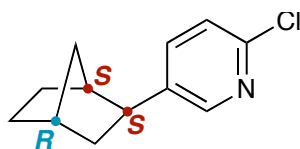


# Chem 341 • Organic Chemistry I

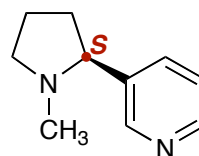
Solutions to additional problems • Chapter 09

## Additional Practice Problems

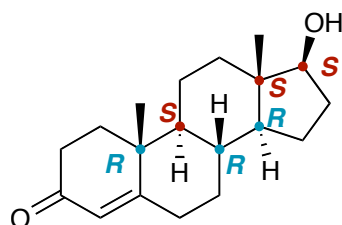
Indicate the R or S configuration for every stereocenter in the molecules shown below.



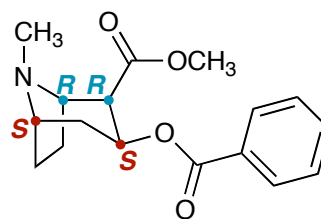
epibatidine



nicotine



Testosterone



cocaine